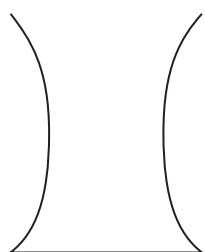


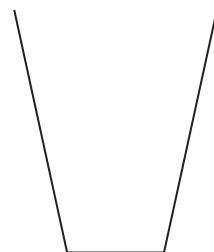
22 A, B, C and D are four containers.



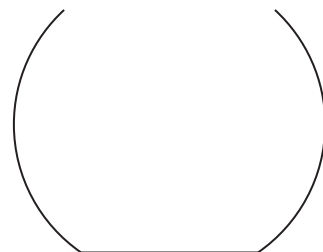
A



B



C

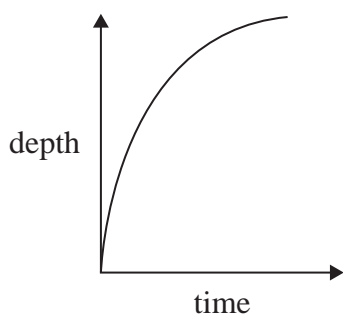


D

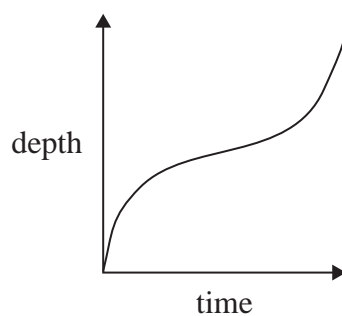
Water is poured into the containers at a constant rate.

The sketch graphs below show the depth of water in each container, t seconds after the water starts to be poured.

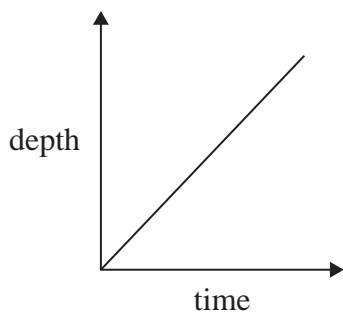
Graph 1



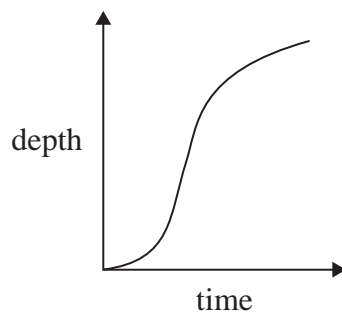
Graph 2



Graph 3



Graph 4



Match each graph to the correct container.

Container	Graph
A	
B	
C	
D	